

5 a Day

KS2 Maths SATs Daily Practice



Subtract the stress, multiply
the fun – try our Maths App!
[twinkl.co.uk/apps/maths](https://www.twinkl.co.uk/apps/maths)



Name:

Date:

KS2 Maths SATs Daily Practice

| | |
|---|-----------------|
| 1 | $81 \times 3 =$ |
| | |
| | |
| | |

| | |
|---|---------------|
| 2 | $965 + 100 =$ |
| | |
| | |
| | |

3. Write the number that is 100 less than one million.



4. Write the number in words that is 30 less than 300 000.



5. 678 is 200 less than what number?



Name:

Date:

KS2 Maths SATs Daily Practice

| | |
|---|-----------------|
| 1 | $26 \times 5 =$ |
| | |
| | |
| | |

| | |
|---|--------------|
| 2 | $368 + 70 =$ |
| | |
| | |
| | |

3. In the number 217 361.05
- a) Which digit is in the hundreds place?
 - b) Which digit is in the tenths place?



Roman Numerals

4. Here is a number written in Roman numerals. DCCIX
- Write the number in figures.
5. Write the year 2017 in Roman numerals.



Name:

Date:

KS2 Maths SATs Daily Practice


1. Put these cars in order of price, starting with the lowest price. One has been done for you.

A




£31,750

B



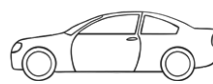
£30,570

C



£3,900

D



£37,150

E



£31,900

B

2. Order the following numbers from smallest to largest.

| | | | | |
|------|------|-----|------|-------|
| 11.1 | 1.01 | 1.1 | 10.1 | 10.11 |
| | | | | |

Place Value

3. In the number 178 390.82

a) Which digit is in the ten thousands place? _____

b) Which digit is in the hundredths place? _____

4. In the number 837 609.51

a) Which digit is in the thousands place? _____

b) Which digit is in the tenths place? _____

5. The temperature outside is -4°C and inside is 15°C . What is the difference in temperature between the outside and inside?



Name:

Date:

KS2 Maths SATs Daily Practice

Rounding

- 1. Round 263 874
 - a) to the nearest 10 000 _____
 - b) to the nearest 1 000 _____
 - c) to the nearest 100 _____

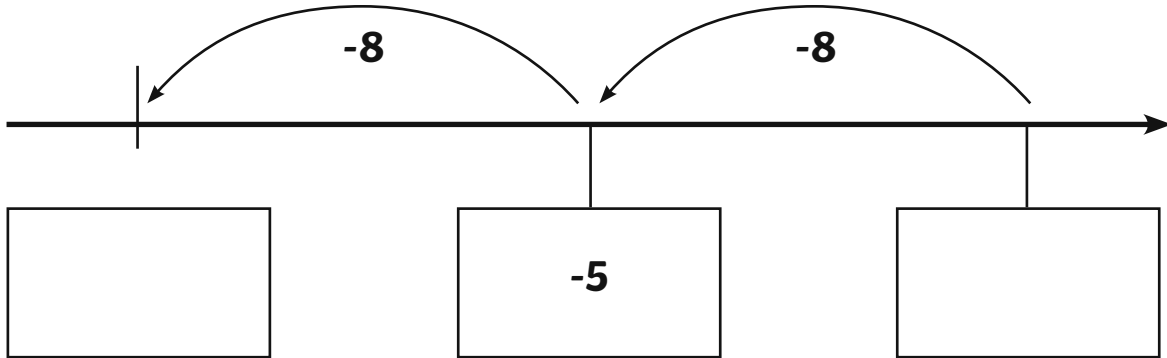
.....

Negative Numbers

- 2. What number is 12 more than -7? _____

-
- 3. Here is part of a number line.

Write the missing numbers in the boxes.



.....

| | |
|---|--------------|
| 4 | $109 - 10 =$ |
| | |
| | |
| | |
| | |

| | |
|---|----------------|
| 5 | $0.2 + 0.04 =$ |
| | |
| | |
| | |
| | |

Name:

Date:

KS2 Maths SATs Daily Practice

1

$$5^2 + 2^2 =$$

2

$$8 \times 800 =$$

3

$$307 - 24.7 =$$

4

$$1080 \div 9 =$$

5

$$20\% \text{ of } 1800 =$$



Name: Date:

KS2 Maths SATs Daily Practice

Missing Number Questions

1. Write the three missing digits to make this addition correct.

$$\begin{array}{r}
 \square 5 2 7 \\
 + 2 \square 1 \square \\
 \hline
 6 0 4 3
 \end{array}$$

2. Write the four missing digits to make this subtraction correct.

$$\begin{array}{r}
 \square 4 \square 6 \\
 - 3 \square 8 \square \\
 \hline
 4 1 2 5
 \end{array}$$

3. Write the three missing digits to make this addition correct.

$$\begin{array}{r}
 6 2 \square \\
 + 2 \square 6 \\
 \hline
 \square 0 5
 \end{array}$$

.....

Algebra

4. $n = 24$

What is $3n - 15$?

5. $28 - 3t = 10$

Work out the value of t .



Name:

Date:

KS2 Maths SATs Daily Practice

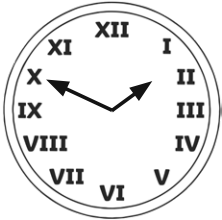
Time

1. Draw the hands on this clock to show the time on this digital clock.



2. A film is 132 minutes long. It starts at 14:50. What time will it finish?

3. This clock is 17 minutes slow. What is the correct time?



4. Circle two numbers that add together to equal 0.75.

0.03

0.7

0.72

0.07

Equivalent Fractions

5. Write the two missing values to make these equivalent fractions correct.

$$\frac{\square}{4} = \frac{9}{12} = \frac{6}{\square}$$